

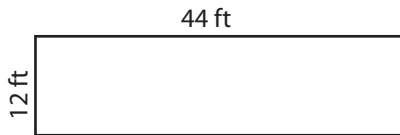
Name : _____

Area of a Rectangle

T1L2S2

Find the area of each rectangle.

1)



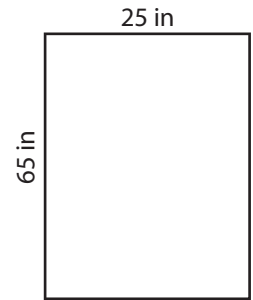
Area =

2)



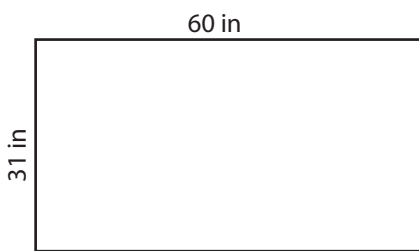
Area =

3)



Area =

4)



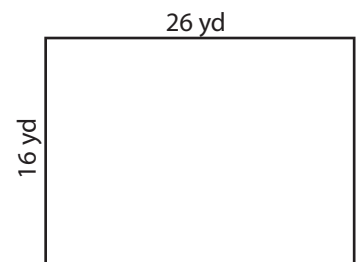
Area =

5)




Area =

6)



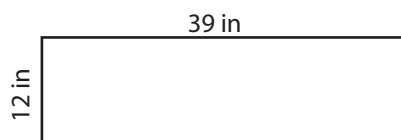
Area =

7)



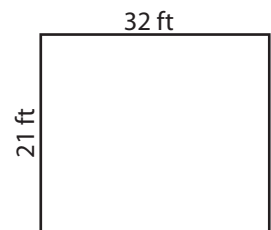
Area =

8)



Area =

9)



Area =

Name : _____

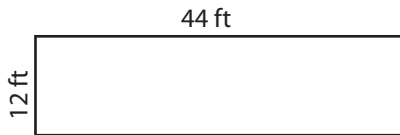
Answer key

Area of a Rectangle

T1L2S2

Find the area of each rectangle.

1)



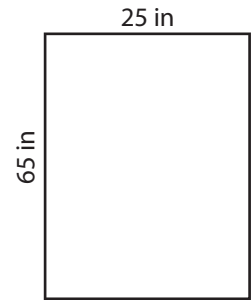
Area = **528 ft²**

2)



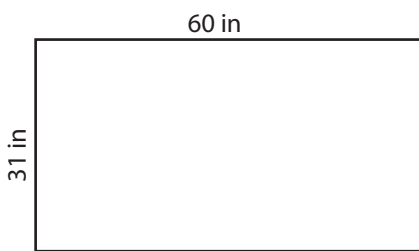
Area = **629 yd²**

3)



Area = **1,625 in²**

4)



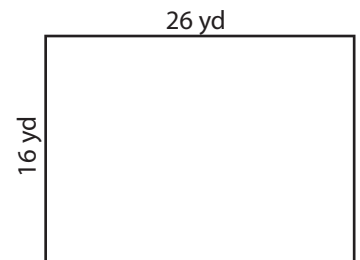
Area = **1,860 in²**

5)



Area = **705 ft²**

6)



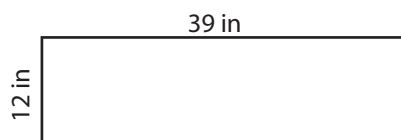
Area = **416 yd²**

7)



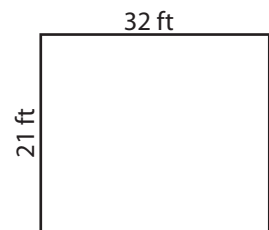
Area = **650 yd²**

8)



Area = **468 in²**

9)



Area = **672 ft²**