

Name : _____

Area of a Rectangle

T2L1S3

A) Find the area of each rectangle for the given measurements.

1) length = 5 in, width = 4 in

Area = _____

2) width = 8 ft, length = 16 ft

Area = _____

3) width = 18 yd, length = 19 yd

Area = _____

4) length = 6 in, width = 1 in

Area = _____

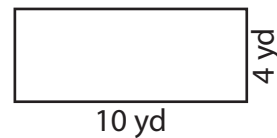
B) Find the area of each rectangle.

5)



Area = _____

6)



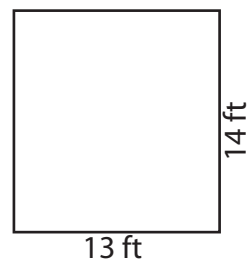
Area = _____

7)



Area = _____

8)



Area = _____

9) PQRS is a rectangle with PQ = 8 yards and QR = 6 yards. Find the area.

Name : _____

Answer key

T2L1S3

Area of a Rectangle

A) Find the area of each rectangle for the given measurements.

1) length = 5 in, width = 4 in

Area = 20 in²

2) width = 8 ft, length = 16 ft

Area = 128 ft²

3) width = 18 yd, length = 19 yd

Area = 342 yd²

4) length = 6 in, width = 1 in

Area = 6 in²

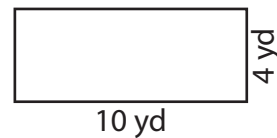
B) Find the area of each rectangle.

5)



Area = 135 ft²

6)



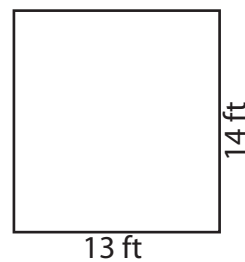
Area = 40 yd²

7)



Area = 126 in²

8)



Area = 182 ft²

9) PQRS is a rectangle with PQ = 8 yards and QR = 6 yards. Find the area.

48 square yards